

10. The Sinusoidal Steady-state Analysis

Input : Sinusoidal function

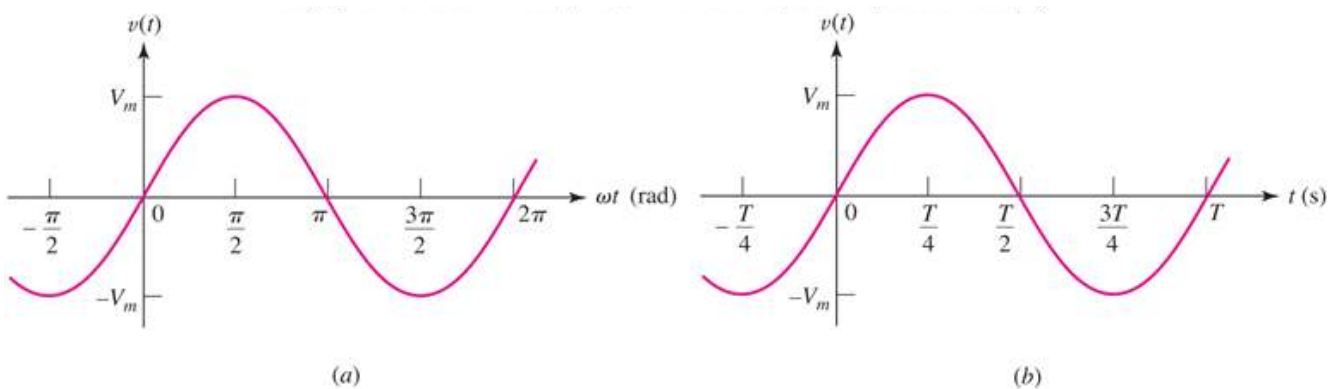
Natural response : same

Forced response (R , L and C): Resistance \rightarrow Impedance(Z) in the s-domain

Extension of techniques of resistive circuit analysis.

10.1 Characteristics of Sinusoids

$$v(t) = V_m \sin(\omega t)$$



(unit) Radian or Degree v.s second

$$v(t) = V_m \sin(\omega t + \theta)$$

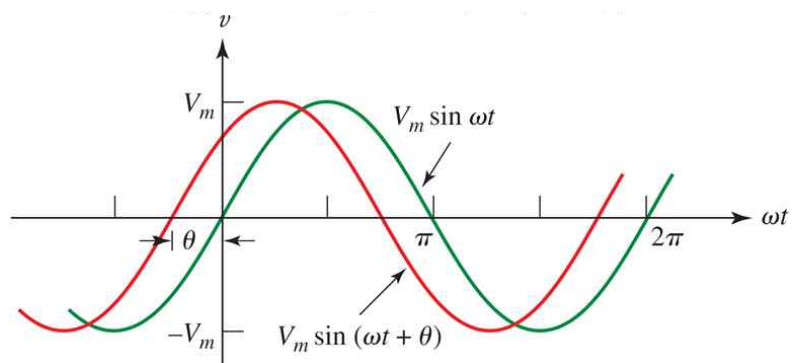
(1) Amplitude : V_m

(2) Radian (Angular) Frequency : ω

$$\omega = 2\pi f = \frac{2\pi}{T} \quad \leftarrow f = \frac{1}{T}$$

rad/sec(각속도)

(3) Phase : θ



Example) Plot the waveforms v.s ωt -axis and t -axis

(1) $v(t) = 10 \sin(100\pi t)$

(2) $v(t) = 10 \sin(100\pi t + 45^\circ)$

(2) $v(t) = 10 \sin(100\pi t - 45^\circ)$

◆ Lagging and Leading

(1) $v(t) = 10 \sin(100\pi t)$ and $v(t) = 10 \sin(100\pi t + 45^\circ)$

(2) $v(t) = 100 \sin(2,000\pi t)$ and $v(t) = 100 \sin(2,000\pi t - \frac{\pi}{6})$

sol)

Out of phase : Lagging or Leading

In phase : The same phase

◆ Converting Sins to Cosines

$$\cos(\omega t) = \sin(\omega t + 90^\circ)$$

$$\sin(\omega t \pm 180^\circ) = -\sin(\omega t) \text{ and } \cos(\omega t \pm 180^\circ) = -\cos(\omega t)$$

Example) Find phase difference.

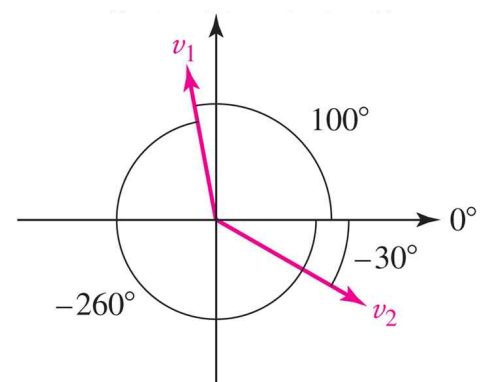
$$v_1(t) = V_{m1} \cos(5t + 10^\circ) \text{ and } v_2(t) = V_{m2} \sin(5t - 30^\circ)$$

sol)

$$\begin{aligned} v_1(t) &= V_{m1} \cos(5t + 10^\circ) \\ &= V_{m1} \sin(5t + 10^\circ + 90^\circ) \\ &= V_{m1} \sin(5t + 100^\circ) \\ &= V_{m1} \sin(5t - 30^\circ + 130^\circ) \end{aligned}$$

Hence, $v_1(t)$ leads $v_2(t)$ by 130° .

OR $v_1(t)$ lags $v_2(t)$ by 230° .



10.2 Forced Response to Sinusoidal Functions

Natural response : the same (Source-free)

◆ The State-state response

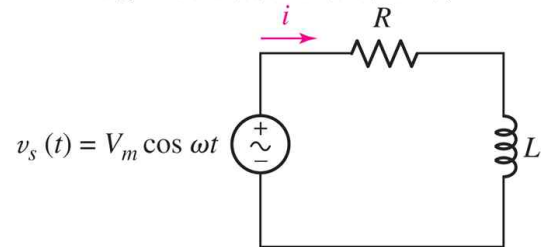
$$L \frac{di}{dt} + Ri = V_m \cos(\omega t)$$

sol)

The forced response always have the general form

$$i(t) = I_1 \cos(\omega t) + I_2 \sin(\omega t)$$

= Original form+its Derivatives



$$L[-I_1 \omega \sin(\omega t) + I_2 \omega \cos(\omega t)] + R[I_1 \cos(\omega t) + I_2 \sin(\omega t)] = V_m \cos(\omega t)$$

$$[-LI_1 \omega + RI_2] \sin(\omega t) + [LI_2 \omega + RI_1 - V_m] \cos(\omega t) = 0$$

$$\Rightarrow -LI_1 \omega + RI_2 = 0 \quad \text{AND} \quad LI_2 \omega + RI_1 - V_m = 0$$

$$\Rightarrow I_1 = \frac{RV_m}{R^2 + \omega^2 L^2} \quad \text{and} \quad I_2 = \frac{\omega LV_m}{R^2 + \omega^2 L^2}$$

$$\text{Hence, } i(t) = \frac{RV_m}{R^2 + \omega^2 L^2} \cos(\omega t) + \frac{\omega LV_m}{R^2 + \omega^2 L^2} \sin(\omega t)$$

$$= \frac{V_m}{\sqrt{R^2 + \omega^2 L^2}} \cos(\omega t - \theta)$$

$$\text{where } \theta = \tan^{-1}\left(\frac{\omega L}{R}\right), \quad A \cos(\omega t) + B \sin(\omega t) = \frac{1}{\sqrt{A^2 + B^2}} \cos(\omega t - \theta)$$

Example 10.1)

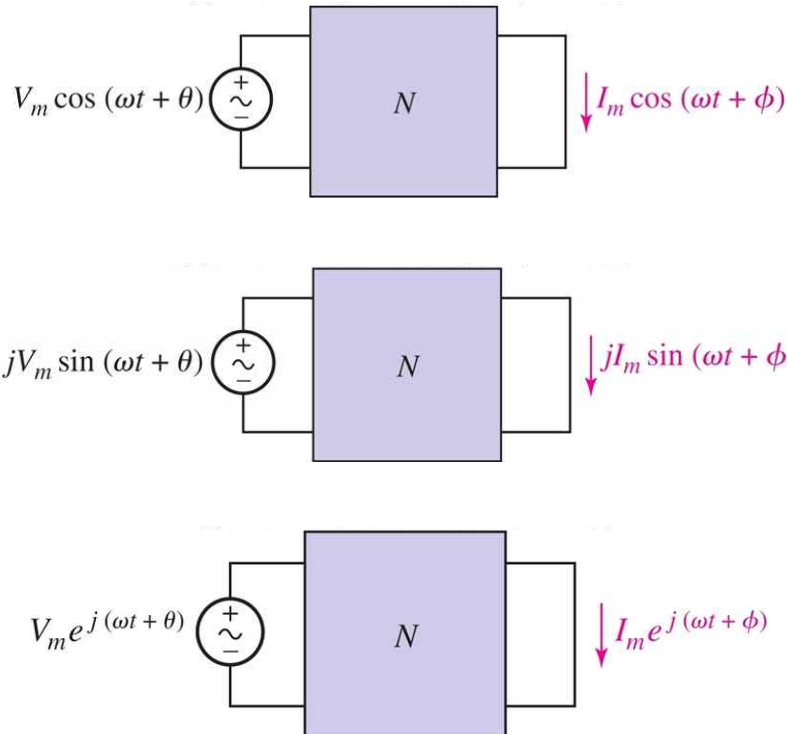
skip

using the other methods

10.3 complex forcing fn.

$$e^{i\theta} = \cos(\theta) + j \sin(\theta)$$

$$V_m e^{j(\omega t + \theta)} = V_m \cos(\omega t + \theta) + j V_m \sin(\omega t + \theta)$$



$$V_m \cos(\omega t + \theta) = \text{Re}\{V_m e^{j(\omega t + \theta)}\} \quad \text{and} \quad I_m \cos(\omega t + \phi) = \text{Re}\{I_m e^{j(\omega t + \phi)}\}$$

The use of complex quantities in the sinusoidal steady-state analysis leads to methods which are much simpler than that of real quantities.

Example) The previous example

sol)

If the complex forcing function is applied

$$v_s(t) \rightarrow V_m e^{j\omega t}$$

then, complex response with unknown amplitude I_m and phase angle ϕ .

$$i(t) \rightarrow I_m e^{j(\omega t + \phi)} \quad \therefore i(t) = I_m \cos(\omega t + \phi)$$

Find amplitude I_m and phase ϕ .

$$Ri + L \frac{di}{dt} = v_s(t) \quad \rightarrow \quad R[I_m e^{j(\omega t + \phi)}] + L \frac{d}{dt} [I_m e^{j(\omega t + \phi)}] = V_m e^{j\omega t}$$

$$RI_m e^{j\omega t} e^{j\phi} + L I_m e^{j\phi} [j\omega e^{j\omega t}] = V_m e^{j\omega t}$$

$$RI_m e^{j\phi} + j\omega L I_m e^{j\phi} = V_m$$

$$I_m e^{j\phi} = \frac{V_m}{R + j\omega L} = \frac{V_m e^{j0^\circ}}{\sqrt{R^2 + \omega^2 L^2} e^{j \tan^{-1}(\omega L/R)}}$$

$$= \frac{V_m}{\sqrt{R^2 + \omega^2 L^2}} e^{-j \tan^{-1}(\omega L/R)}$$

Hence, $I_m = \frac{V_m}{\sqrt{R^2 + \omega^2 L^2}}$ and $\phi = -\tan^{-1}\left(\frac{\omega L}{R}\right)$

$$\Rightarrow i(t) = I_m \cos(\omega t + \phi)$$

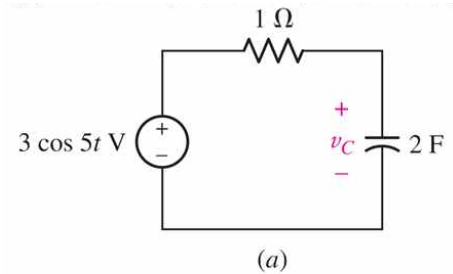
$$= \frac{V_m}{\sqrt{R^2 + \omega^2 L^2}} \cos(\omega t - \tan^{-1}[\omega L/R])$$

Example 10.2) Find steady-state $v_c(t)$

sol)

$$v_s(t) = 3 \cos(5t) \rightarrow 3e^{j5t}$$

$$v_c(t) = V_m \cos(5t + \phi) \rightarrow V_m e^{j(5t + \phi)}$$



Differential eq.

$$Ri_c(t) + v_c(t) = v_s(t) \quad \leftarrow \quad i_c = C \frac{dv_c}{dt}$$

$$RC \frac{dv_c}{dt} + v_c(t) = v_s(t)$$

$$2 \frac{dv_c}{dt} + v_c = v_s$$

$$v_s(t) \rightarrow 3e^{j5t} \quad \text{and} \quad v_c(t) \rightarrow V_m e^{j(5t + \phi)}$$

$$2[V_m e^{j\phi} (j5) e^{j5t}] + V_m e^{j\phi} e^{j5t} = 3e^{j5t}$$

$$j10 V_m e^{j\phi} + V_m e^{j\phi} = 3$$

$$V_m e^{j\phi} = \frac{3}{1 + j10} = \frac{3}{\sqrt{1 + 100}} e^{-j \tan^{-1}(10/1)}$$

$$= 0.02985 e^{-j84.3^\circ} [V]$$

$$= 29.85 e^{-j84.3^\circ} [mV]$$

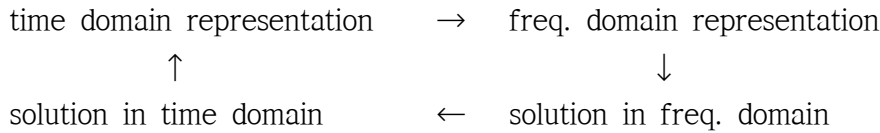
Hence,

$$v_c(t) = 29.85 \cos(5t - 84.3^\circ) [V]$$

10.4 The phasor

Frequency domain(s-domain) representation

◆ Phasor transformation



Example) sinusoidal forcing fn. : amplitude and phase

$$v(t) = V_m \cos(\omega t + \theta) \rightarrow V = V_m e^{j\theta} = V_m \angle \theta$$

$$i(t) = I_m \cos(\omega t + \phi) \rightarrow I = I_m e^{j\phi} = I_m \angle \phi$$

Example 10.3) Find phasor representation of $v(t) = 100 \cos(400t - 30^\circ)$.

sol)

$$V = 100 \angle -30^\circ \text{ at freq. } \omega = 400 \text{ rad/sec}$$

◆ phasor relationships for R

$$v(t) = V_m \cos(\omega t + \theta) \rightarrow V_m e^{j(\omega t + \theta)}$$

$$i(t) = I_m \cos(\omega t + \phi) \rightarrow I_m e^{j(\omega t + \phi)}$$

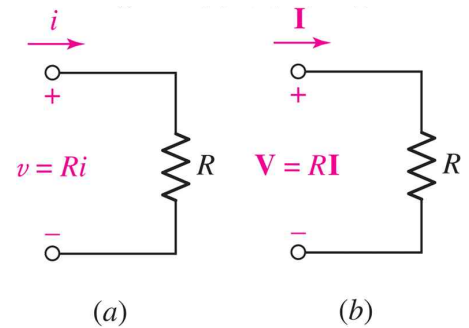
Ohm's Law

$$v(t) = R i(t)$$

$$V_m e^{j(\omega t + \theta)} = R I_m e^{j(\omega t + \phi)}$$

$$V_m e^{j\theta} = R I_m e^{j\phi}$$

$$V = R I$$



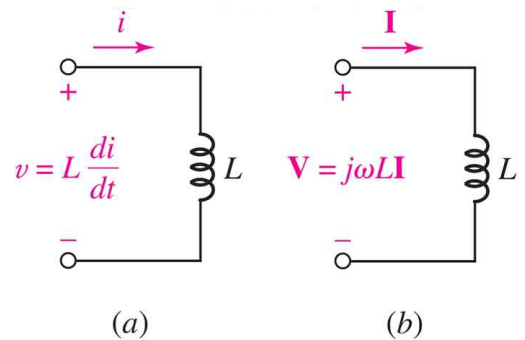
◆ phasor relationships for L

$$v(t) = L \frac{di}{dt}$$

$$V_m e^{j(\omega t + \theta)} = L [I_m e^{j\phi} (j\omega) e^{j\omega t}]$$

$$V_m e^{j\theta} = j\omega L I_m e^{j\phi}$$

$$V = j\omega L I$$



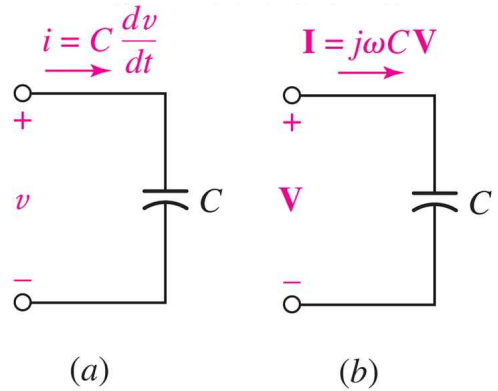
◆ phasor relationships for C

$$i(t) = C \frac{dv}{dt}$$

$$I_m e^{j(\omega t + \phi)} = C [V_m e^{j\phi} (j\omega) e^{j\omega t}]$$

$$I_m e^{j\theta} = j\omega C V_m e^{j\phi}$$

$$I = j\omega C V$$



◆ Impedance and Admittance

$$Z \equiv \frac{V}{I} \quad Y \equiv \frac{I}{V} = \frac{1}{Z}$$

: Ohm's law in the freq. domain

(1) Resistor $Z = R$

(2) Inductor $Z = j\omega L$

(2) capacitor $Z = \frac{1}{j\omega C}$

Example 10.4) Find $i(t)$ for $L = 4H$ inductor applying $v(t) = 8 \cos(100t - 50^\circ)$

sol)

$$V = 8 \angle -50^\circ \text{ at } \omega = 400 \text{ rad/sec}$$

$$I = \frac{V}{Z} = \frac{8 \angle -50^\circ}{j400 \times 3} = \frac{8 \angle -50^\circ}{1200 \angle 90^\circ} = 0.02 \angle -140^\circ \text{ [A]}$$

$$\text{Hence, } i(t) = 0.02 \cos(400t - 140^\circ) \text{ [A]} \\ = 20 \cos(400t - 140^\circ) \text{ [mA]}$$

◆ All circuit analysis techniques

the same technique

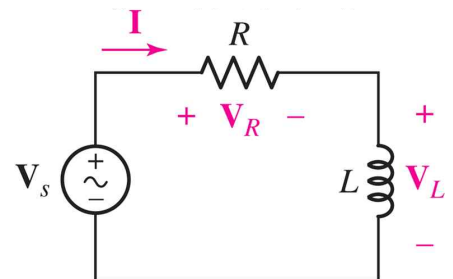
KVL, KCL, Mesh analysis, Nodal analysis, Thevenin's equi. etc.

Example) Find I , given $V_s = V_m \angle 0^\circ$ [$v_s(t) = V_m \cos(\omega t)$]

sol)

KVL $V_R + V_L = V_s$

$$RI + j\omega LI = V_m \angle 0^\circ$$

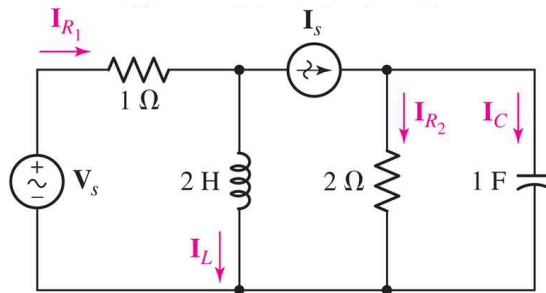


$$I = \frac{V_m \angle 0^\circ}{R + j\omega L} = \frac{V_m \angle 0^\circ}{\sqrt{R^2 + \omega^2 L^2} \angle \tan^{-1}(\omega L/R)}$$

$$= \frac{V_m}{\sqrt{R^2 + \omega^2 L^2}} \angle -\tan^{-1}(\omega L/R)$$

Hence, $i(t) = \frac{V_m}{\sqrt{R^2 + \omega^2 L^2}} \cos(\omega t + \phi)$ where $\phi = -\tan^{-1}(\omega L/R)$

Example 10.5) Find I_s and $i_s(t)$ operating at $\omega = 2 \text{ rad/sec}$, Given $I_c = 2 \angle 28^\circ$



sol)

$$V_c = \frac{1}{j\omega C} \times I_c = \frac{I_c}{j2} = \frac{2 \angle 28^\circ}{2 \angle 90^\circ} = 1 \angle -62^\circ$$

$$I_{R2} = \frac{V_c}{2\Omega} = 0.5 \angle -62^\circ$$

$$I_s = I_{R2} + I_c = 0.5 \angle -62^\circ + 1 \angle -62^\circ = 1.5 \angle -62^\circ$$

Hence, $i_s(t) = 1.5 \cos(2t - 62^\circ) \text{ [A]}$

Example 10.6) Find equivalent impedance.

$$\omega = 5 \text{ rad/sec}$$

sol)

$$200 \text{ mF} \rightarrow Z_c = \frac{1}{j\omega C} = \frac{1}{j} = -j$$

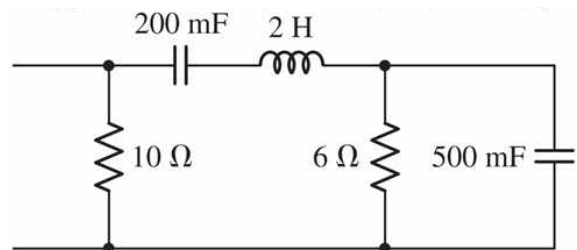
$$500 \text{ mF} \rightarrow Z_c = \frac{1}{j\omega C} = \frac{1}{j2.5} = -j0.4$$

$$2 \text{ H} \rightarrow Z_L = j\omega L = j10$$

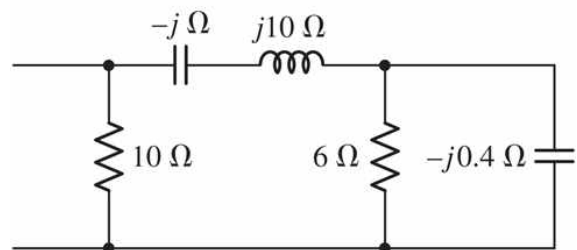
$$Z_{eq} = 10\Omega // \{-j + j10 + [6 // -j0.4]\}$$

$$= 4.255 + j4.929 \text{ [}\Omega\text{]}$$

$$\text{where } 6 // -j0.4 = \frac{-j2.4}{6 - j0.4} = 0.02655 - j0.3982$$



(a)



(b)

Example 10.7) Find $i(t)$

sol)

$$w = 3,000 \text{ rad/sec}$$

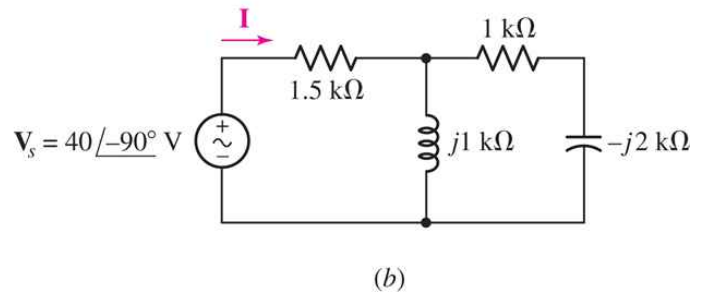
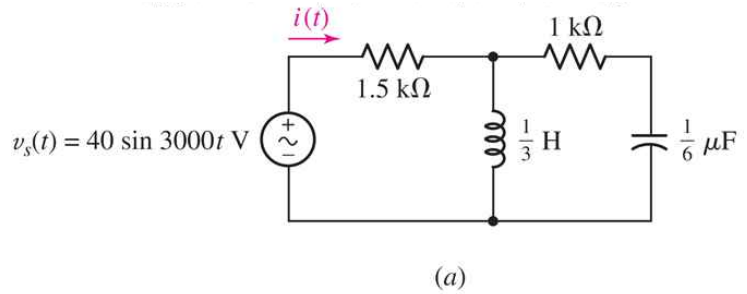
$$v_s(t) = 40 \sin(3,000t) \\ = 40 \cos(3,000t - 90^\circ)$$

$$\Rightarrow V_s = 40 \angle -90^\circ$$

$$L = \frac{1}{3} [H] \quad \rightarrow Z_L = jwL = j1,000 = j1k$$

$$C = \frac{1}{6} [F] \quad \rightarrow Z_C = \frac{1}{jwC} = -j2k \\ = \frac{1}{j3,000 \times \frac{10^{-6}}{6}}$$

$$Z_{eq} = 1.5 + j1 // [1k - j2] \\ = 2 + j1.5 [k\Omega] = 2.5 \angle 36.87^\circ [k\Omega]$$



Phasor Current

$$I = \frac{V_s}{Z_{eq}} = \frac{40 \angle -90^\circ}{2.5 \angle 36.87^\circ} = 16 \angle -126.87^\circ [mA]$$

Hence,

$$i(t) = 16 \cos(3,000t - 126.87^\circ) [mA]$$

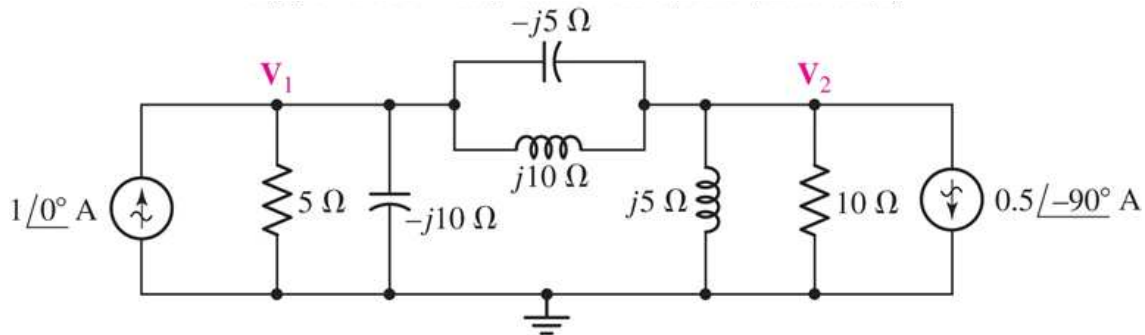
◆ Warning!

$$i(t) = \frac{40 \sin(3,000t)}{2.5 \angle 36.9^\circ} \quad (\times)$$

$$i(t) = i(t) = \frac{40 \sin(3,000t)}{2 + j1.5} \quad (\times)$$

10.6 Nodal and Mesh analysis

Example 10.8) Find $v_1(t)$ and $v_2(t)$



sol)

At the left node, KCL

$$\frac{V_1}{5} + \frac{V_1}{-j10} + \frac{V_1 - V_2}{-j5} + \frac{V_1 - V_2}{j10} = 1 \angle 0^\circ = 1 + j0$$

At the right node, KCL

$$\frac{V_2 - V_1}{-j5} + \frac{V_2 - V_1}{j10} + \frac{V_2}{j5} + \frac{V_2}{10} = 0.5 \angle -90^\circ = j0.5$$

Multiplying 10 to the eqs.

$$2V_1 + jV_1 + j2(V_1 - V_2) - j(V_1 - V_2) = 10$$

$$j2(V_2 - V_1) - j(V_2 - V_1) - j2V_2 + V_2 = j5$$

Arranging

$$(2 + j2)V_1 - jV_2 = 10$$

$$-jV_1 + (1 - j)V_2 = j5$$

Cramer's law

$$V_1 = \frac{\begin{vmatrix} 10 & -j \\ j5 & 1-j \end{vmatrix}}{\begin{vmatrix} 2+j2 & -j \\ -j & 1-j \end{vmatrix}} = \frac{10 - j10 - 5}{(2+j2)(1-j) + 1} = \frac{5 - j10}{5} = 1 - j2 = 2.24 \angle -63.4^\circ$$

$$V_2 = \frac{\begin{vmatrix} 2+j2 & 10 \\ -j & j5 \end{vmatrix}}{\begin{vmatrix} 2+j2 & -j \\ -j & 1-j \end{vmatrix}} = \frac{-10 + j10 - (-j10)}{5} = \frac{-10 + j20}{5} = -2 + j4 = 4.47 \angle 116.6^\circ$$

Hence,

$$v_1(t) = 2.24 \cos(\omega t - 63.4^\circ) [V]$$

$$v_2(t) = 4.47 \cos(\omega t + 116.6^\circ) [V]$$

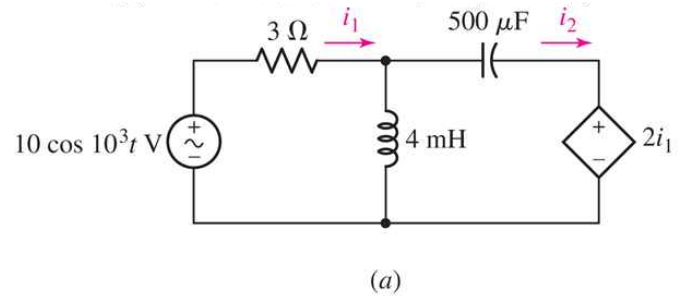
Example 10.9) Find $i_1(t)$ and $i_2(t)$

sol)

$$\omega = 1,000 \text{ rad/sec}$$

$$4 \text{ mH} \rightarrow j\omega L = j4$$

$$500 \mu\text{F} \rightarrow \frac{1}{j\omega C} = -j2$$



Around left mesh

$$3I_1 + j4(I_1 - I_2) = 10$$

$$\Rightarrow (3 + j4)I_1 - j4I_2 = 10 \quad (*)$$

Around right mesh

$$j4(I_2 - I_1) - j2I_2 + 2I_1 = 0$$

$$\Rightarrow (2 - j4)I_1 + j2I_2 = 0 \quad (**)$$

(*) + 2 × (**)

$$(7 - j4)I_1 = 10$$

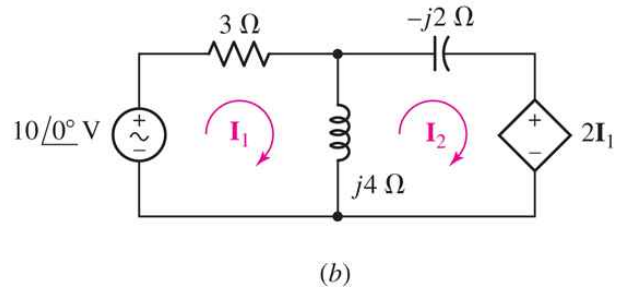
$$\Rightarrow I_1 = \frac{10}{7 - j4} = \frac{10}{8.06 \angle -29.75^\circ} = 1.24 \angle 29.75^\circ$$

$$\Rightarrow I_2 = 2.77 \angle 56.3^\circ$$

Hence,

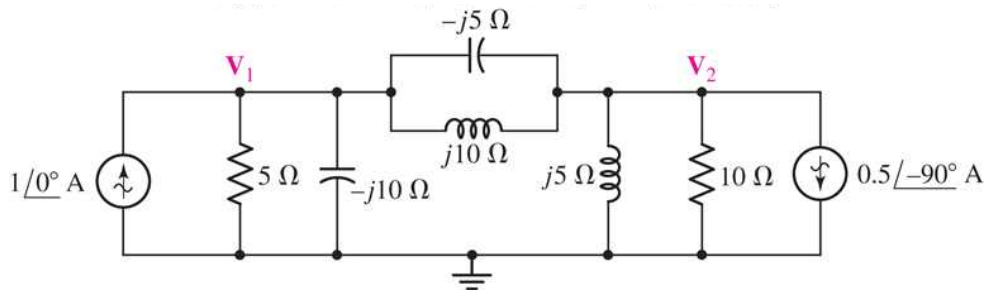
$$i_1(t) = 1.24 \cos(1,000t + 29.7^\circ) \text{ [A]}$$

$$i_2(t) = 2.77 \cos(1,000t + 56.3^\circ) \text{ [A]}$$



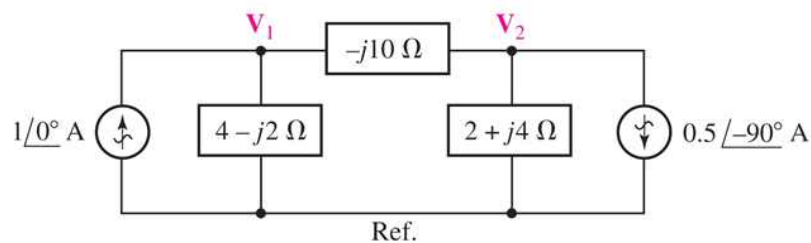
10.7 Superposition, source transformations, and Thevenin's thm

Example 10.10) Find $v_1(t)$ using superposition, Return to Example 10.8).



sol)

Simplification



(1) Only the left source, $I_L = 1A$ (Right source open)

$$V_{1L} = I_{L,4-j2} \times (4-j2)$$

$$= \frac{1-j3}{3-j4} \times (4-j2) = \frac{-2-j14}{3-j4} = 2-j2 \text{ [V]}$$

$$\text{where } I_{L,4-j2} = \frac{(2-j6)}{4-j2+(2-j6)} \times I_L = \frac{2-j6}{6-j8} \times 1A = \frac{1-j3}{3-j4}$$

(2) Only the right source, $I_R = 0.5 \angle -90^\circ = -j0.5$ (Left source open)

$$V_{1R} = I_{R,4-j2} \times (4-j2)$$

$$= \frac{-2+j}{6-j8} \times (4-j2) = -1 \text{ [V]}$$

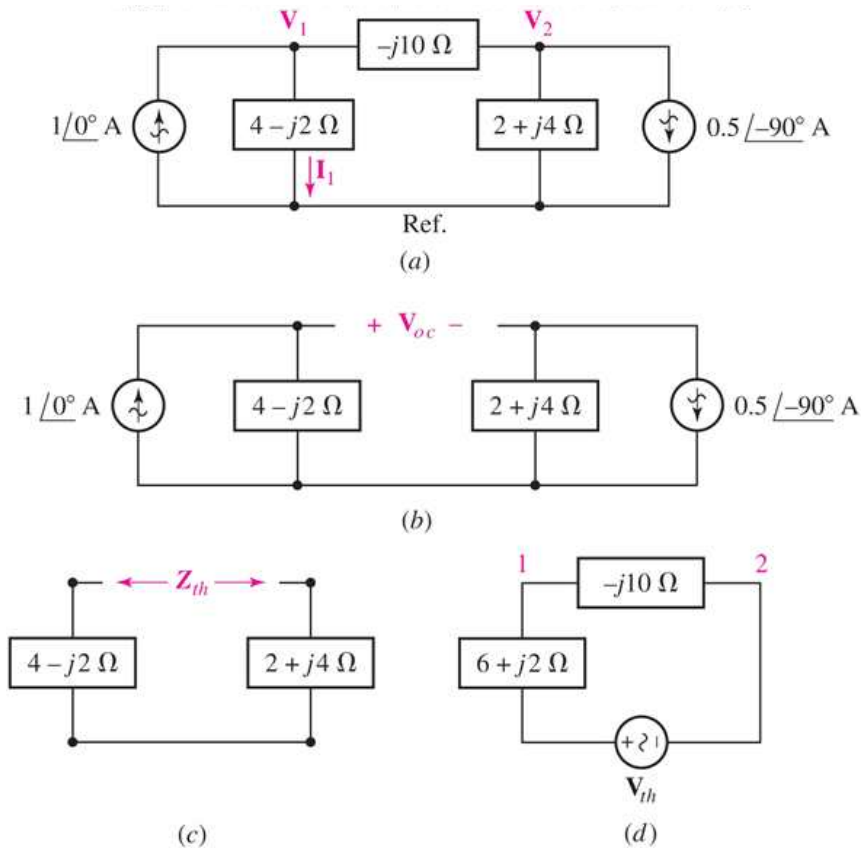
$$\text{where } I_{R,4-j2} = \frac{2+j4}{2+j4+(4-j12)} \times (-I_R) = \frac{2+j4}{6-j8} \times (j0.5) = \frac{-2+j}{6-j8}$$

Total current

$$V_1 = V_{1L} + V_{1R} = (2-j2) + (-1) = 1-j2 = 2.24 \angle -63.4^\circ$$

$$\Rightarrow v_1(t) = 2.24 \cos(\omega t - 63.4^\circ) \text{ [V]}$$

Example 10.11) Find Thevenin's equivalent, faced by the $-j10 \Omega$, Return to Example 10.10)



sol)

(1) Open circuit voltage, V_{oc} (Open the impedance $-j10 \Omega$) ~ Fig. (b)

$$\begin{aligned} V_{oc} &= V_{4-j2} - V_{2+j4} \\ &= (4 - j2) \times 1A - (2 + j4) \times (+j0.5) \\ &= 6 - j3 \text{ [V]} \end{aligned}$$

(2) Equivalent Impedance, Z_{th} (Remove the independent sources) ~ Fig. (c)

$$Z_{th} = (4 - j2) + (2 + j4) = 6 + j2 \text{ [\Omega]}$$

Thevenin's equi. circuit ~ Fig. (d)

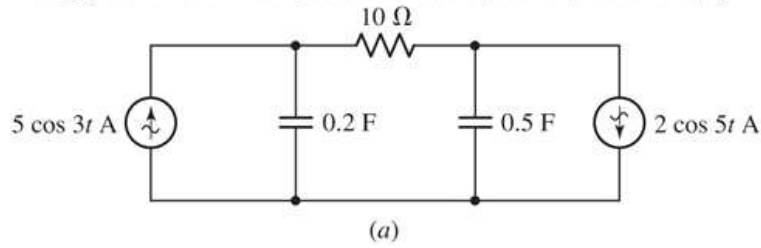
Current through the impedance, $-j10 \Omega$

$$I_{12} = \frac{V_{th}}{(6 + j2) + (-j10)} = \frac{6 - j3}{6 - j8} = 0.6 + j0.3 \text{ [A]}$$

Downward current through the $4 - j2 \Omega$ branch.

$$\begin{aligned} I_1 &= 1A - I_{12} = 1 - (0.6 + j0.3) = 0.4 - j0.3 \text{ [A]} \\ \Rightarrow V_1 &= I_1 \times (4 - j2) = (0.4 - j0.3) \times (4 - j2) = 1 - j2 \text{ [V]} \end{aligned}$$

Example 10.12) Find the power $P_{10\Omega}$.



sol)

2 sources operating different freq.

(1) Right source

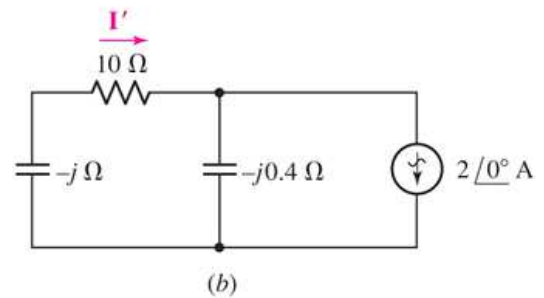
$$\omega = 5 \text{ rad/sec}$$

$$0.2F \rightarrow \frac{1}{j\omega C} = -j$$

$$0.5F \rightarrow \frac{1}{j\omega C} = -j0.4$$

$$\Rightarrow I' = \frac{-j0.4}{10 - j - j0.4} \times 2A = 79.23 \angle -82.03^\circ \text{ [mA]}$$

$$\Rightarrow i'(t) = 79.23 \cos(5t - 82.03^\circ) \text{ [mA]}$$



(2) Left source

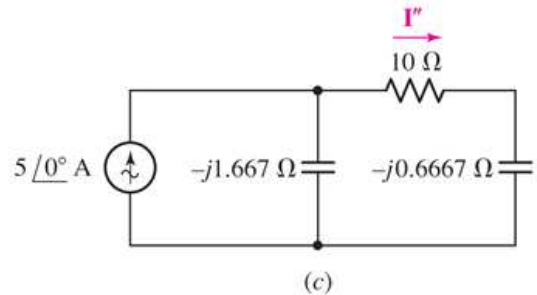
$$\omega = 3 \text{ rad/sec}$$

$$0.2F \rightarrow \frac{1}{j\omega C} = -j1.667$$

$$0.5F \rightarrow \frac{1}{j\omega C} = -j0.6667$$

$$\Rightarrow I'' = \frac{-j1.667}{10 - j0.6667 - j1.667} \times 5A = 811.7 \angle -78.86^\circ \text{ [mA]}$$

$$\Rightarrow i''(t) = 811.7 \cos(3t - 78.86^\circ) \text{ [mA]}$$



$$\text{Total current, } i_{10\Omega} = i' + i'' \\ = 79.23 \cos(5t - 82.03^\circ) + 811.7 \cos(3t - 78.86^\circ) \text{ [mA]}$$

The power

$$p_{10\Omega} = i_{10\Omega}^2 \times 10\Omega \\ = 10 \times [79.23 \cos(5t - 82.03^\circ) + 811.7 \cos(3t - 78.86^\circ)]^2 \text{ [\mu W]}$$

<Homeworks>

연습문제 1~9, 10~70 (그림 있는 문제)